

NAME	
-------------	--

PART ONE
2 MINUTES FOR THIS PAGE

1. 6 and 10 is

2. $4 + 10 =$

3.

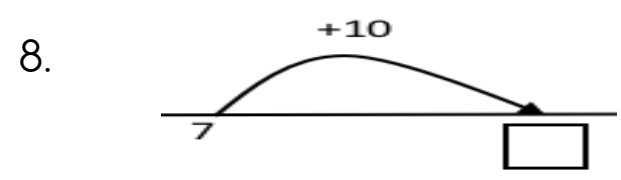
9	<input style="width: 30px; height: 15px;" type="text"/>
19	

4. 10 less than 21 is

5. + 10 = 17

6. $22 - 10 =$

7. 3 is less than 13



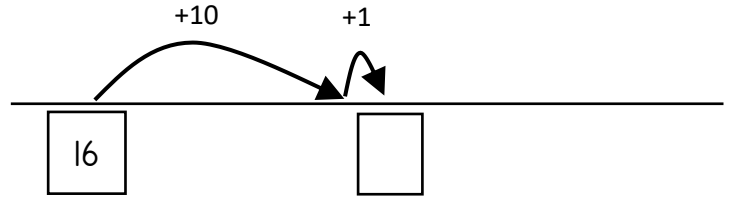
9. 8 and makes 18

10. - 10 = 6

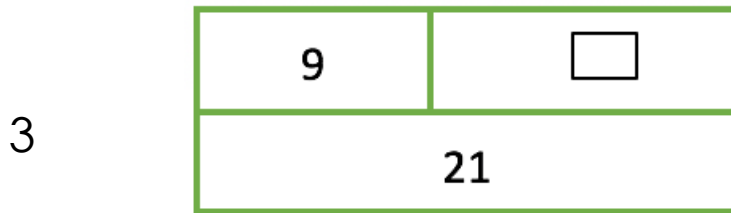
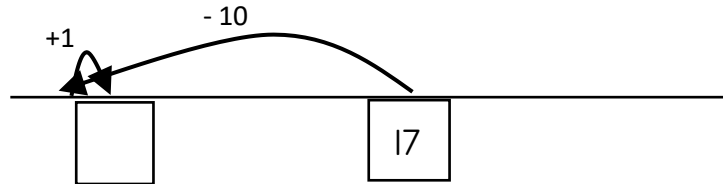
Total out of 10:	
-------------------------	--

PART TWO
1 MINUTE FOR THIS PAGE

1. 16 and 11 is



2. $17 - 9 =$



4. $20 - 12 =$

5. $18 - 11 = 18 - 10 -$

Total out of 5: